



INDIAN SCHOOL AL WADI AL KABIR

DEPARTMENT OF MATHEMATICS (2021-2022)

CHAPTER- MONEY

RESOURCE PERSON-MS. MIDHAT FATHIMA

WORKSHEET


NAME: _____ CLASS: _____ SEC: _____ DATE: _____

Q1) Convert the following and complete the table given below.

Rupees into paise		Paise into rupees	
₹ 8		500 p	
₹ 4		400 p	
₹ 50		100 p	
10 rupees		700 p	
₹ 1		2000 p	

Q2. Meenu purchased a toy bus and a toy train at a toy exhibition. How much money

Did she spend?






























₹ 1300

₹ 1250

₹ 1200

₹ 1400

Q3. Tick the value of notes or coins needed to shop the items given below.

Items	Money needed
 ₹2030	    
 ₹1600	     
 ₹525	     
 ₹1075	     

Q4. Solve the following.

a.

	₹	5	7	0
-	₹	1	7	2
	₹			

b.

	₹	7	8	5	0
+	₹	2	8	2	5
	₹				